

25

Multiplying Integers

Find the product.

$$-13 \cdot 39$$



26

Multiplying Integers

Beth went shopping and withdrew an average of \$25 from her account every hour for 6 hours. What was the change in her account balance?



27

Multiplying Integers

Find the product.


$$-14 \cdot -29$$



28

Multiplying Integers

A fish is ascending at a rate of 0.74 feet per second. What is the change in the location of the fish after 22 seconds?



29

Dividing Integers

Find the quotient.

$$-636 \div -53$$



©2016/2018 Lindsay Perro. All Rights Reserved.

www.beyondtheworksheet.com

30

Dividing Integers

Find the quotient.

$$460 \div -4$$



©2016/2018 Lindsay Perro. All Rights Reserved.

www.beyondtheworksheet.com

31

Dividing Integers

Find the quotient.

$$-820 \div 10$$



©2016/2018 Lindsay Perro. All Rights Reserved.


www.beyondtheworksheet.com

32

Dividing Integers

Find the quotient.

$$156 \div -6$$



©2016/2018 Lindsay Perro. All Rights Reserved.


www.beyondtheworksheet.com

33

The Distributive Property

Simplify the expression.

$$-2x(-6 + 10)$$



34

The Distributive Property

Simplify the expression.

$$-6(3x - 4)$$

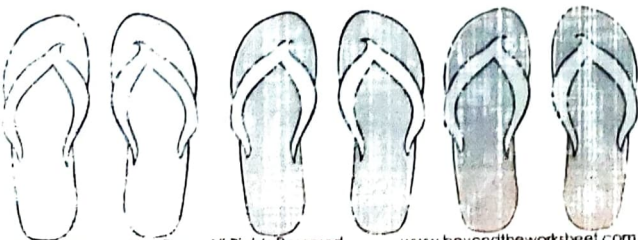


35

The Distributive Property

Simplify the expression.

$$-7(-5 + 3x) - 4x$$




36

The Distributive Property

Simplify the expression.

$$3x(-2 - 8) - 12x$$




37

Fractions to Decimals

Convert to a decimal.

$$\frac{5}{6}$$



©2016/2018 Lindsay Perro. All Rights Reserved.

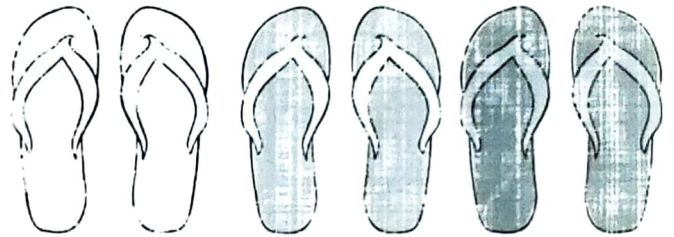
www.beyondtheworksheet.com

38

Fractions to Decimals

Convert to a decimal.

$$\frac{11}{12}$$



©2016/2018 Lindsay Perro. All Rights Reserved.

www.beyondtheworksheet.com

39

Fractions to Decimals

Convert to a decimal.

$$\frac{7}{8}$$



©2016/2018 Lindsay Perro. All Rights Reserved.


www.beyondtheworksheet.com

40

Fractions to Decimals

Convert to a decimal.

$$\frac{11}{2}$$



©2016/2018 Lindsay Perro. All Rights Reserved.


www.beyondtheworksheet.com

41

Decimals to Fractions

Convert to a fraction.

0.34



©2016/2018 Lindsay Perro. All Rights Reserved.

www.beyondtheworksheet.com

42

Decimals to Fractions

Convert to a fraction.

0.45



©2016/2018 Lindsay Perro. All Rights Reserved.

www.beyondtheworksheet.com

43

Decimals to Fractions

Convert to a fraction.

0.105



©2016/2018 Lindsay Perro. All Rights Reserved.

www.beyondtheworksheet.com

44

Decimals to Fractions

Convert to a fraction.

4.7



©2016/2018 Lindsay Perro. All Rights Reserved.


www.beyondtheworksheet.com

45

Unit Rate

Find the unit rate.

Bags of Beach Toys	Cost (\$)
0	0
2	10
4	20
6	30



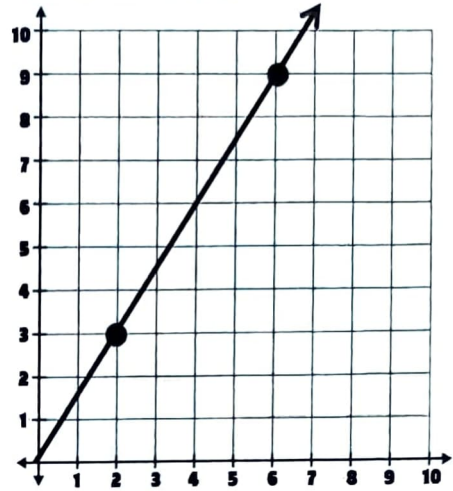
©2016/2018 Lindsay Perro. All Rights Reserved.

www.beyondtheworksheet.com

46

Unit Rate

Find the unit rate.



©2016/2018 Lindsay Perro. All Rights Reserved.

www.beyondtheworksheet.com

47

Unit Rate

The Marcus Family is traveling to the beach. In 4 hours they traveled 340 miles. At this rate, how far will they have traveled after 9 hours?




©2016/2018 Lindsay Perro. All Rights Reserved.

www.beyondtheworksheet.com

48

Unit Rate

Fifteen beach towels cost \$135. What is the cost of eight beach towels?



©2016/2018 Lindsay Perro. All Rights Reserved.

www.beyondtheworksheet.com